










US Coins & Bills


Keep this page handy — it shows what each coin and bill is worth.


 1¢ Penny 1¢ 1 cent	 5¢ Nickel 5¢ = 5 pennies	 10¢ Dime 10¢ = 2 nickels
 25¢ Quarter 25¢ = 5 nickels	 50¢ Half dollar 50¢ = 2 quarters	 100¢ Dollar coin 100¢ = \$1.00
PAPER BILLS		
 \$1 One dollar 100¢	 \$5 Five dollars 500¢	 \$10 Ten dollars 1000¢





What's It Worth?


Write the value of each coin in cents.


1)  _____


2)  _____


3)  _____


4)  _____

5)  _____

6)  _____

7)  _____

8)  _____

9)  _____

Count the Coins


Add up the coins and write the total amount.

1)     Total _____

2)    Total _____

3)     Total _____

4)    Total _____

5)      Total _____

6)      Total _____

7)    Total _____

8)    Total _____



Make Change from \$1

You pay with one dollar (100¢). Write the change you should get back.

1) Item costs **77¢** — change? _____

2) Item costs **57¢** — change? _____

3) Item costs **60¢** — change? _____

4) Item costs **53¢** — change? _____

5) Item costs **64¢** — change? _____

6) Item costs **50¢** — change? _____

7) Item costs **21¢** — change? _____

8) Item costs **89¢** — change? _____

9) Item costs **59¢** — change? _____

10) Item costs **63¢** — change? _____

11) Item costs **55¢** — change? _____

12) Item costs **94¢** — change? _____



Money Word Problems

Read each problem, show your work, and write the answer.

- 1 Liam buys a pencil for 45¢ and an eraser for 30¢. How much does he spend in all?

ANSWER

- 2 Ava has 2 quarters and 3 dimes. How much money does she have?

ANSWER

- 3 A sticker costs 25¢. Noah pays with a one-dollar bill. How much change should he get back?

ANSWER

- 4 Mia has 4 nickels and 6 pennies. How much money is that altogether?

ANSWER

- 5 Sam wants a toy that costs 90¢. He has 3 quarters. How much more money does he need?

ANSWER

- 6 Zoe saves 1 dime every day. How much will she have saved after 7 days?

ANSWER



Answer Key

Identify

- | | | | | | | |
|--------|--------|-------|--------|--------|--------|-------|
| 1. 1¢ | 2. 50¢ | 3. 1¢ | 4. 50¢ | 5. 25¢ | 6. 25¢ | 7. 5¢ |
| 8. 50¢ | 9. 1¢ | | | | | |

Count the Coins

- | | | | | | | |
|--------|--------|--------|--------|--------|--------|--------|
| 1. 50¢ | 2. 25¢ | 3. 80¢ | 4. 16¢ | 5. 42¢ | 6. 22¢ | 7. 45¢ |
| 8. 25¢ | | | | | | |

Make Change from \$1

- | | | | | | | |
|--------|--------|---------|---------|--------|--------|--------|
| 1. 23¢ | 2. 43¢ | 3. 40¢ | 4. 47¢ | 5. 36¢ | 6. 50¢ | 7. 79¢ |
| 8. 11¢ | 9. 41¢ | 10. 37¢ | 11. 45¢ | 12. 6¢ | | |

Word Problems

- | | | | | | |
|--------|--------|--------|--------|--------|--------|
| 1. 75¢ | 2. 80¢ | 3. 75¢ | 4. 26¢ | 5. 15¢ | 6. 70¢ |
|--------|--------|--------|--------|--------|--------|

